

# Şekil Sayı Eşleştirme

×

= 0

▽

= 3

⬠

= 1

◊

= 8

+

= 9

□

= 4

△

= 5

○

= 6

☆

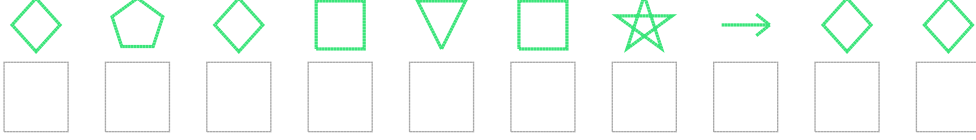
= 2

→

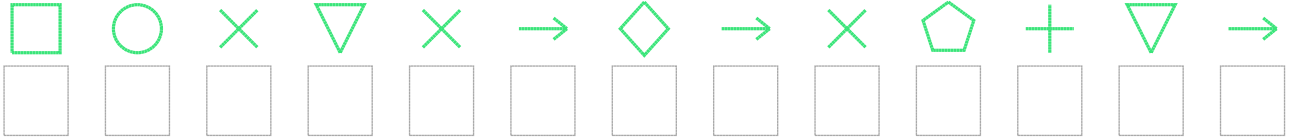
= 7

Aşağıdaki uzun şifreleri hatasız çözerek altlarına yazın:

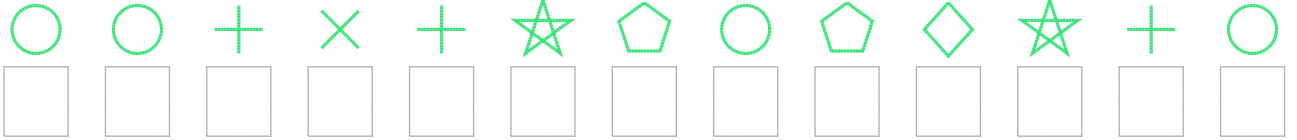
1. Şifre



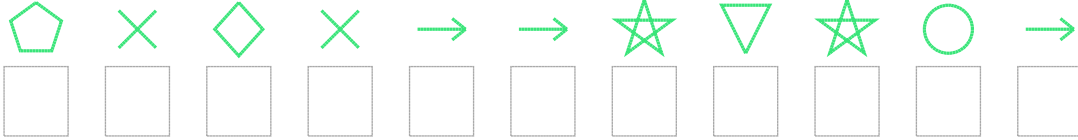
2. Şifre



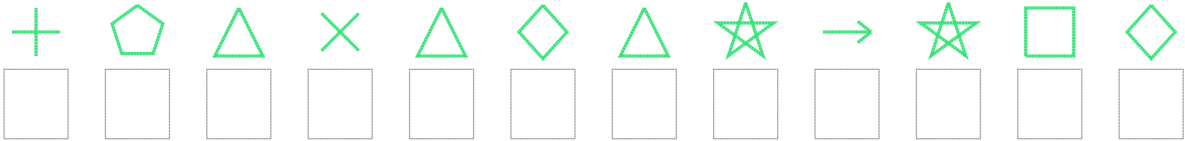
3. Şifre




4. Şifre



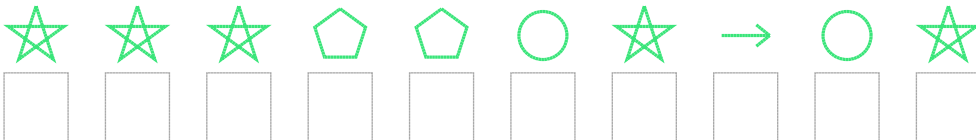
5. Şifre



6. Şifre



7. Şifre



□ BONUS: 2. ve 5. şifrenin üçüncü rakamının toplamı kaçtır? .....

## Cevap Anahtarı

1. Şifre: 8184342788
2. Şifre: 4603078701937
3. Şifre: 6690921618296
4. Şifre: 10807723267
5. Şifre: 915058527248
6. Şifre: 140924582
7. Şifre: 2221162762

□ Bonus Soru Cevabı: 5